
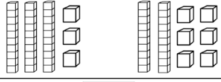
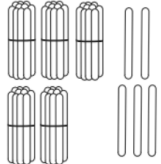


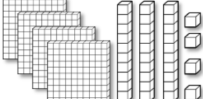






# June 2022

## Math Problem of the Day Calendar

SUNDAY	MONDAY	TUESDAY	WEDNESDAY	THURSDAY	FRIDAY	SATURDAY
			1 10 more than 3 is equal to:  _____	2 $\begin{array}{r} 226 \\ + 703 \\ \hline \end{array}$	3 $\begin{array}{r} 887 \\ - 624 \\ \hline \end{array}$	4 Take a walk. Pick a popular item you see on the walk. Keep a tally of that item. **Send a picture of you with your tallies.**
5 Use math while <b>inventing</b> a snack. **Send a picture of you and how you used math for your snack.	6 Find the missing number. $8 + \square = 12$ $9 + \square = 17$	7 3 hundreds + 8 tens + 7 units is equal to:  _____	8 $\begin{array}{r} 275 \\ + 668 \\ \hline \end{array}$	9 Compare <, >, or =  ____ <input type="checkbox"/> ____	10 What is the value of the 2 in 3,289? 2 200 2,000 20	11 Give 3 people 2 high-fives. How many high-fives did you give?  _____
12 Play 3 games of Tic-Tac-Toe. Count the total number of Xs and Os. Which one had more? How many more?	13 $\begin{array}{r} 74 \\ - 38 \\ \hline \end{array}$	14 How many? _____ 	15 What time is it? 	16 Least to Greatest  ____ _	17 $\begin{array}{r} 834 \\ 238 \\ +745 \\ \hline \end{array}$	18 Play a board game. **Send a picture!**
19 Keep track of the weather for the entire week! (Type and Temperature) **Send a picture.	20 Even or Odd? 3 + 5 = <input type="checkbox"/> even 2 + 3 = <input type="checkbox"/> _____ 4 + 2 = <input type="checkbox"/> _____ 3 + 4 = <input type="checkbox"/> _____	21 What number is in the tens place? 3,456  _____	22   _____	23 $\begin{array}{r} 368 \\ + 455 \\ \hline \end{array}$	24 What time is it? 	25 Ask an adult if you can help with something. Time how long it takes you. Take a picture of how you helped! **Send it.**
26 Do 3 kind things for each person in your house. How many kind things did you do?  _____	27 How much? _____ 	28 Find the missing number. $6 + \square = 18$ $\square + 10 = 20$	29  + = _____ + = _____ - = _____ - = _____	30 What is the value of a quarter?  _____		

Saturday and Sunday tasks are not required, but each earn you a ticket towards a special summer drawing!