




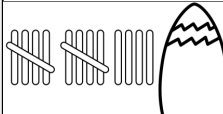
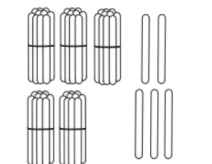





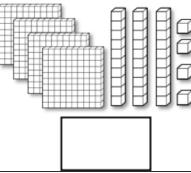
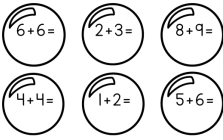
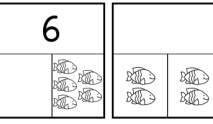





June 2022

Math Problem of the Day Calendar

SUNDAY	MONDAY	TUESDAY	WEDNESDAY	THURSDAY	FRIDAY	SATURDAY												
			<p>1</p> <p>10 more than 3 is equal to:</p> <p>_____</p>	<p>2</p> <p>Fill in the missing numbers.</p> <table border="1" style="display: inline-table; border-collapse: collapse;"> <tr> <td style="padding: 2px 10px;">1</td> <td style="padding: 2px 10px;">2</td> <td style="padding: 2px 10px;">3</td> <td style="padding: 2px 10px;"> </td> </tr> <tr> <td style="padding: 2px 10px;"> </td> <td style="padding: 2px 10px;">12</td> <td style="padding: 2px 10px;">13</td> <td style="padding: 2px 10px;">14</td> </tr> <tr> <td style="padding: 2px 10px;">21</td> <td style="padding: 2px 10px;">22</td> <td style="padding: 2px 10px;"> </td> <td style="padding: 2px 10px;">24</td> </tr> </table>	1	2	3			12	13	14	21	22		24	<p>3</p> <p>5 - 1 = ____</p> <p>6 - 4 = ____</p> <p>7 - 5 = ____</p> <p>4 - 2 = ____</p>	<p>4</p> <p>Take a walk. Pick a popular item you see on the walk. Keep a tally of that item. **Send a picture of you with your tallies.**</p>
1	2	3																
	12	13	14															
21	22		24															
<p>5</p> <p>Eat a snack that has mixed pieces (i.e. Chex Mix, Skittles, etc) and sort them by size or color. **Send a picture.**</p>	<p>6</p> <p>Find the missing number.</p> <p><input style="width: 40px; height: 30px;" type="text"/> + 6 = 11</p> <p>7 + <input style="width: 40px; height: 30px;" type="text"/> = 15</p>	<p>7</p> <p>Draw the hands on the clock.</p> 	<p>8</p> <p>How many? _____</p> <p>tens ones</p> 	<p>9</p> <p>Draw tally marks.</p> 	<p>10</p> <p>Complete the pattern.</p> 	<p>11</p> <p>Give 3 people 2 high-fives. How many high-fives did you give?</p> <p>_____</p>												
<p>12</p> <p>Play 3 games of Tic-Tac-Toe. Count the total number of Xs and Os. Which one had more? How many more?</p>	<p>13</p> <p>How many? _____</p> 	<p>14</p> <p>How many? _____</p> 	<p>15</p> <p>Draw the hands on the clock.</p> 	<p>16</p> <p>Draw tally marks.</p> 	<p>17</p> <p>How many? _____</p> <p>tens ones</p> 	<p>18</p> <p>Play a board game. **Send a picture!**</p>												
<p>19</p> <p>Help an adult do something for HALF an hour. **Send a picture of what you did!**</p>	<p>20</p> <p>Before and After</p> 	<p>21</p> <p>Complete the pattern.</p> 	<p>22</p> <p>How many? _____</p> 	<p>23</p> <p>Part Part Whole</p> 	<p>24</p> <p>Part Part Whole</p> 	<p>25</p> <p>Ask an adult if you can help with something. Time how long it takes you. Take a picture of how you helped! **Send it.**</p>												
<p>26</p> <p>Do 3 kind things for each person in your house. How many kind things did you do?</p> <p>_____</p>	<p>27</p> <p>Skip count by</p> <p>2s to 20</p> <p>5s to 50</p> <p>10s to 100 to an adult.</p>	<p>28</p> <p>Find the missing number.</p> <p>6 + <input style="width: 40px; height: 30px;" type="text"/> = 13</p>	<p>29</p> <p>How many? _____</p> 	<p>30</p> <p>Before and After</p> 														

Saturday and Sunday tasks are not required, but each earn you a ticket towards a special summer drawing!